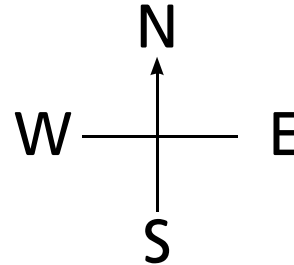
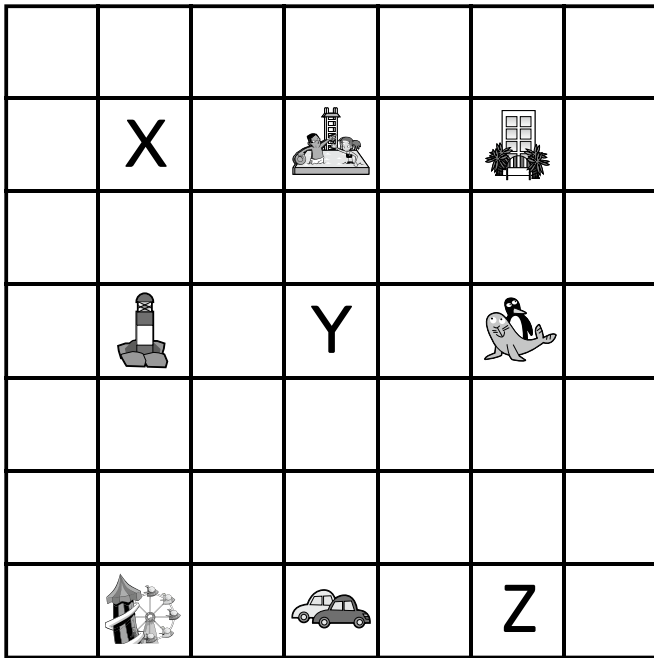

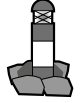







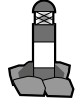
North, South, East and West







From X, what direction is:

- | | | | |
|--|--|--|--|
| 1.  | 2.  | 3.  | 4.  |
| <div style="border: 1px solid black; width: 40px; height: 40px; display: flex; align-items: center; justify-content: center; font-size: 24px;">E</div> | <div style="border: 1px solid black; width: 40px; height: 40px;"></div> | <div style="border: 1px solid black; width: 40px; height: 40px;"></div> | <div style="border: 1px solid black; width: 40px; height: 40px;"></div> |

From Y, what direction is:

- | | | | |
|--|--|--|--|
| 5.  | 6.  | 7.  | 8.  |
| <div style="border: 1px solid black; width: 40px; height: 40px;"></div> | <div style="border: 1px solid black; width: 40px; height: 40px;"></div> | <div style="border: 1px solid black; width: 40px; height: 40px;"></div> | <div style="border: 1px solid black; width: 40px; height: 40px;"></div> |

From Z, what direction is:

- | | | | |
|--|---|---|---|
| 9.  | 10.  | 11.  | 12.  |
| <div style="border: 1px solid black; width: 40px; height: 40px;"></div> | <div style="border: 1px solid black; width: 40px; height: 40px;"></div> | <div style="border: 1px solid black; width: 40px; height: 40px;"></div> | <div style="border: 1px solid black; width: 40px; height: 40px;"></div> |



I can use the directions North, South, East and West

Shape, position and movement: Applying and using

