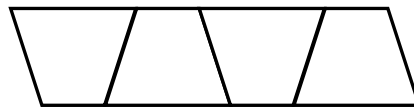
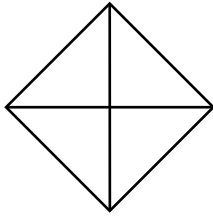





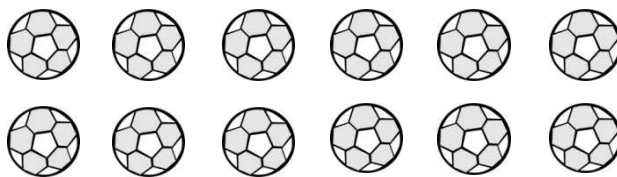
1. Colour a quarter of each of these two shapes



2. Divide each of these shapes into quarters:



3. Colour three quarters of these balls.



4. Jack had 8 sweets. He ate three quarters of them.
How many did he have left?

5. What fraction of each shape has been coloured?

