

Exercise 2

A 1 $\square + 0 = 1$

2 $2 + \square + 2 = 6$

3 $\square = 5 - 0$

4 $2 + 1 + 1 =$

5 $1 + \square = 2$

6 $\square + 5 = 9$

7 $\square + 3 = 5$

8 1, 2, 3, \square

9 $\square + 3 = 9$

10 $4 = \square - 2$

B 1 Put these numbers in order
1, 8, 4

2 Write four as a numeral.

3 What is the 5th letter of the
alphabet?

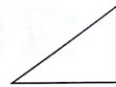
4 What is the sum of 8 and 1?

5 Subtract 4 from 9

6 How many more is 5 than 2?


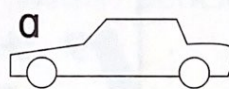
7 2p, 2p, 1p =

8 What is the name of
this shape.



9 How many months in a year?

10 Which car is shorter?



★ Find the next number

2, 5, 8, 11, 14, \square

What is the rule?

Exercise 2

A 1 $6 = \square - 1$

2 $\square + 2 = 10$

3 $1 + \square = 1$

4 $3 + 1 + 2 =$

5 $6 = 7 -$

6 87, 88, 89, \square

7 $8 + 7 =$

8 $23 - 2 =$

9 $5 \times 2 =$

10 $20 - 2 =$

11 $\square \times 2 = 8$

12 $12 \div 4 =$

13 $29 + 1 =$

14 $12 \div 3 =$

15 $3 + 4 + 3 =$

B 1 4 tens =

2 What is the value of 2 in 21?

3 Add 5 and 2.

4 Which coins can make 7p?

5 What day is before Thursday?

6 Which is more, 106 or 116?

7 What is 10 more than 89?

8 Add 12 and 4.

9 What is the total of 8 and 6?

10 How many corners has a triangle?

11 If it is September, what was last month?

12 How much change will I get from 50p if I spend 10p?

13 What is half of 10?

14 What is 6 multiplied by 5?

15 56, 58, 60, \square



Find the next number.

6, 18, 30, 42, 54, \square

What is the rule?

Exercise 16

A 1 $8 + \square = 13$

2 $15 - 7 =$

3 $2 \times 6 =$

4 $5 + \square + 5 + 5 = 20$

5 $12 - \square = 2$

6 655, 656, \square , 658

7 $4 + 7 =$

8 $22 - 7 =$

9 $3 \times 3 =$

10 $17 - 6 =$

11 $7 \times \square = 14$

12 $70 \div 7 =$

13 $22 + 3 =$

14 $\square \div 5 = 5$

15 $2 + 1 + 1 =$

B 1 In 63, what does the 6 stand for?

2 Count on 5 from 47.

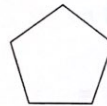
3 Take 8 from 14.

4  $\bigcirc \bigcirc \bigcirc \bigcirc = \bigcirc 5p$

5 How long is it from 7 o'clock to 11 o'clock?

6 Put these numbers in order.
83, 479, 36, 217

7 What is this shape?



8 What is the value of 8 in 489?

9 What is the total of 3, 6, 9?

10 18 minus 5 plus 6 =

11 Winston had 26 pencils.
If he lost 8, how many does he have left?

12 710, 700, \square , 680

13 4 times 0 =

14 85 take away 3 =

15 Write one hundred and seventeen in numerals.

Write down sums that have 12 as the answer.

How many can you think of?